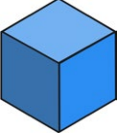







# 3D Shape Properties Table

Look carefully at the properties of these 3D shapes. Write your results in the table.

3D Shape	Number of Straight Edges	Number of Curved Edges	Number of Vertices	Does it roll?	Does it Stack?
 <b>Cube</b>					
 <b>Cylinder</b>					
 <b>Sphere</b>					
 <b>Cuboid</b>					
 <b>Cone</b>					
 <b>Square-Based Pyramid</b>					

twinkl.co.uk

What do your results tell you about the shapes? \_\_\_\_\_